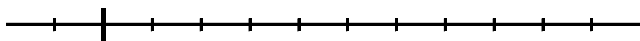


加 法 - 1

$$(+3) + (+5) =$$

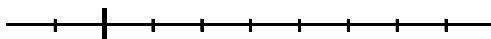


$$(+3) + (-5) =$$

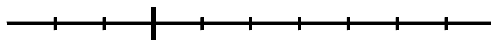


1, 次の計算の答えを、数直線を使って求めなさい。(数字などは書かずに \frown だけでよい。)

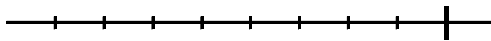
$$(+3) + (+4) =$$



$$(-2) + (+6) =$$



$$(-4) + (-2) =$$



$$(+3) + (-5) =$$

