


加 法 - 1

☆ $(+3) + (+5) =$

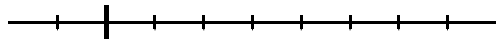


☆ $(+3) + (-5) =$

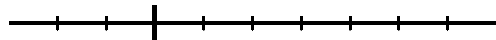


1, 次の計算の答えを数直線を使って求めなさい。

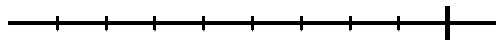
① $(+3) + (+4) =$



② $(-2) + (+6) =$



③ $(-4) + (-2) =$



④ $(+3) + (-5) =$

